



# Biogeography

## Reading Climate Charts

Leveled Assessment \_\_\_\_/4

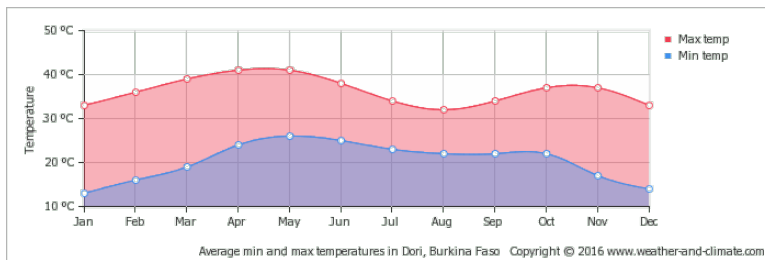
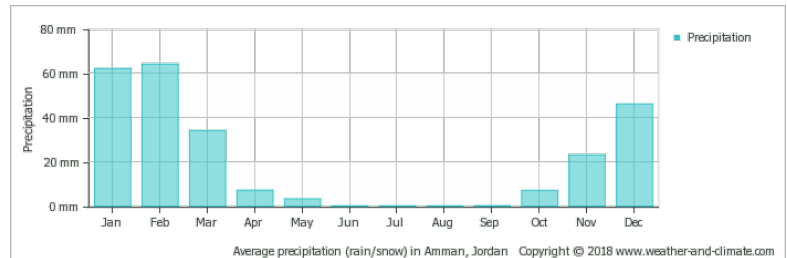
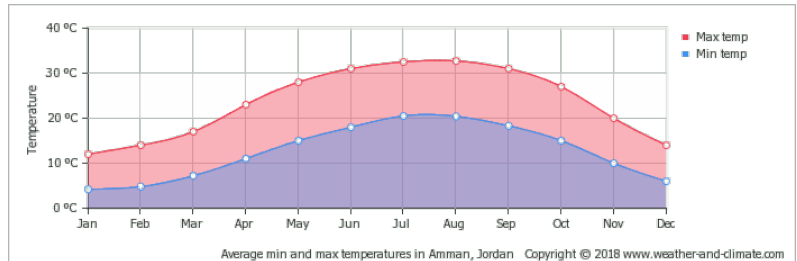
Name: \_\_\_\_\_

Section: \_\_\_\_\_

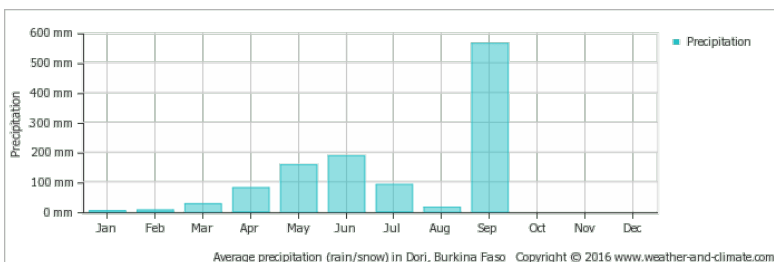
Score: \_\_\_\_/5

**Directions:** Use the precipitation and temperature charts to answer the series of questions regarding the biodiversity and potential speciation for the given region. Pay close attention to the graph's scales.

1. Based on the climate and precipitation charts above what types of plants and animals would you expect to live around Amman? Explain providing evidence from the charts to the right.



2. Based on the climate and precipitation charts above what types of plants and animals would you expect to live around Dori? Explain providing evidence from the charts to the left.



3. Based on the climate and precipitation charts above what types of plants and animals would you expect to live around Ilulissat? Explain providing evidence from the charts to the right.

